



Name: _____


Date: _____


APPLE MATH


Finish the exercises and write the answer in the apple.


$6+1=$ 


$5+2=$ 


$7+3=$ 


$8+2=$ 


$3+0=$ 


$2+4=$ 


$5+0=$ 


$4+1=$ 


$6+2=$ 


$8+0=$ 


$3+4=$ 


$4+4=$ 


$3+4=$ 


$6+5=$ 


$3+3=$ 

$5+1=$ 

$5+6=$ 

$5+4=$ 

$7+6=$ 

$0+3=$ 

$4+6=$ 