

Balancing Equations

Balance the equations by typing numbers in the boxes. Some boxes can remain empty.

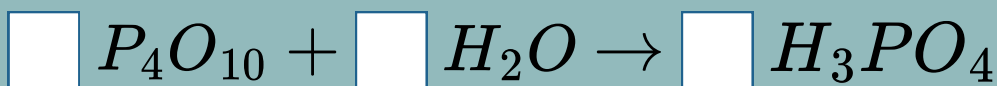
1



2



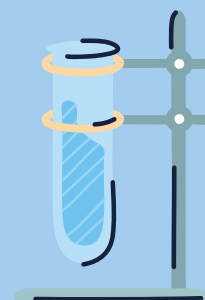


3



4



5



Balancing Equations

Balance the equations by writing numbers in the boxes.
Some boxes can remain empty.

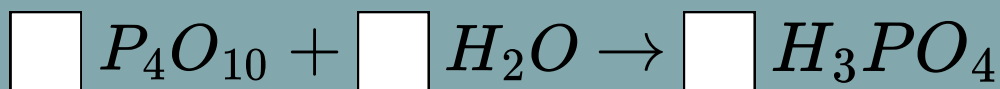
1



2



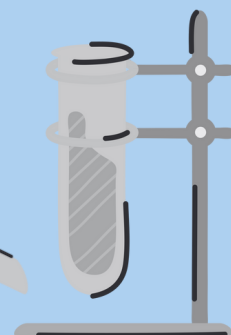

3



4



5



Answer Page

Use this page to check that you have balanced the equations correctly.

